



Nome: _____

Data: ___/___/___

1. Cobre e completa.

4	4	4	4	4	4	4	4	4	4	4	4	4	4	4	4	4
4	4															


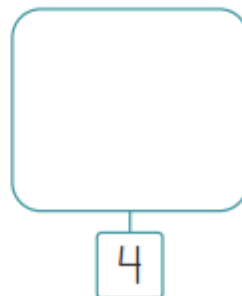

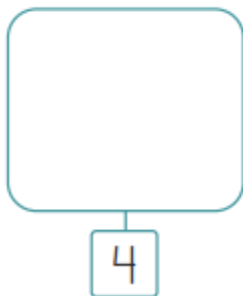
2. Pinta 4 contas no colar de contas.



3. Forma grupos de 4 balões.





4. Escreve o número ou desenha o número de elementos representados em cada grupo.





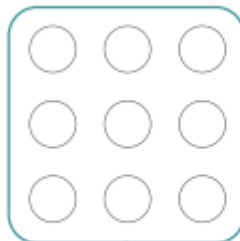

5. Completa a sequência.

•	••	•••	••••	•	••	•••	••••									
1	2	3	4	1												

6. Liga cada grupo ao número e ao cartão correspondente ao número de elementos.



7. Pinta a quantidade indicada.



8. Descobre o padrão e completa-o.



9. Completa a sequência numérica.

