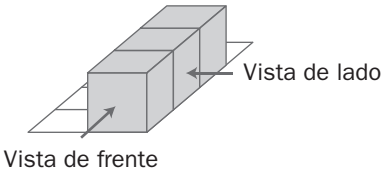
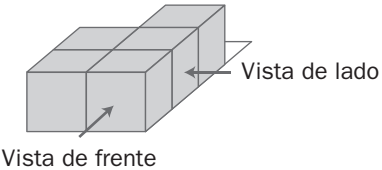
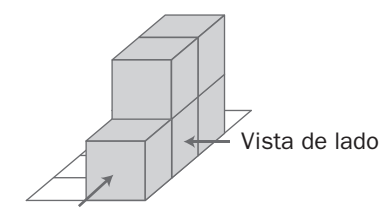
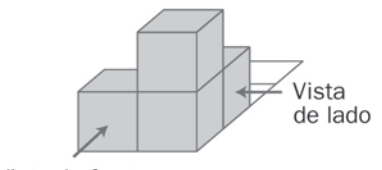


Nome: _____ Data: ____/____/____

Visualização espacial

1. Com cubos, constrói os sólidos e regista.

Sólidos	Vista de frente	Vista de lado	N.º de cubos																
 <p>Vista de frente</p> <p>Vista de lado</p>	<table border="1" style="width: 100%; height: 100%;"> <tr><td> </td><td> </td><td> </td><td> </td></tr> <tr><td> </td><td> </td><td> </td><td> </td></tr> </table>									<table border="1" style="width: 100%; height: 100%;"> <tr><td> </td><td> </td><td> </td><td> </td></tr> <tr><td> </td><td> </td><td> </td><td> </td></tr> </table>									
 <p>Vista de frente</p> <p>Vista de lado</p>	<table border="1" style="width: 100%; height: 100%;"> <tr><td> </td><td> </td><td> </td><td> </td></tr> <tr><td> </td><td> </td><td> </td><td> </td></tr> </table>									<table border="1" style="width: 100%; height: 100%;"> <tr><td> </td><td> </td><td> </td><td> </td></tr> <tr><td> </td><td> </td><td> </td><td> </td></tr> </table>									
 <p>Vista de frente</p> <p>Vista de lado</p>	<table border="1" style="width: 100%; height: 100%;"> <tr><td> </td><td> </td><td> </td><td> </td></tr> <tr><td> </td><td> </td><td> </td><td> </td></tr> </table>									<table border="1" style="width: 100%; height: 100%;"> <tr><td> </td><td> </td><td> </td><td> </td></tr> <tr><td> </td><td> </td><td> </td><td> </td></tr> </table>									
 <p>Vista de frente</p> <p>Vista de lado</p>	<table border="1" style="width: 100%; height: 100%;"> <tr><td> </td><td> </td><td> </td><td> </td></tr> <tr><td> </td><td> </td><td> </td><td> </td></tr> </table>									<table border="1" style="width: 100%; height: 100%;"> <tr><td> </td><td> </td><td> </td><td> </td></tr> <tr><td> </td><td> </td><td> </td><td> </td></tr> </table>									