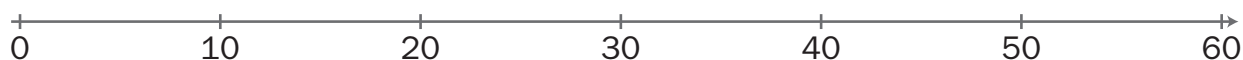


NOME: _____ DATA: _____

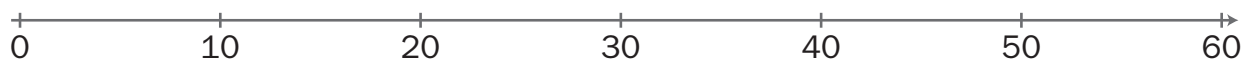
SUBTRAÇÃO — ESTRATÉGIAS DE CÁLCULO

- 1 Na reta numérica, utiliza as estratégias que aches mais fáceis para resolveres as subtrações. Regista a forma como o fizeste.

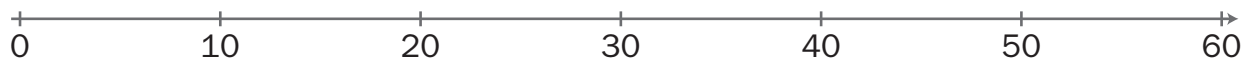
a) $40 - 25 =$



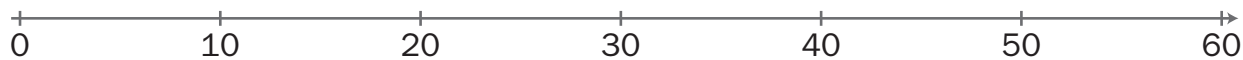
b) $48 - 11 =$



c) $55 - 21 =$



d) $50 - 29 =$



e) $59 - 39 =$

