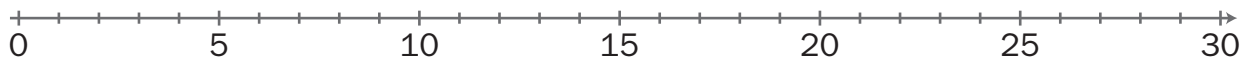


NOME: \_\_\_\_\_ DATA: \_\_\_\_\_

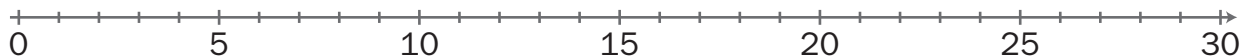
## SUBTRAÇÃO

1 Calcula, utilizando as retas numéricas.

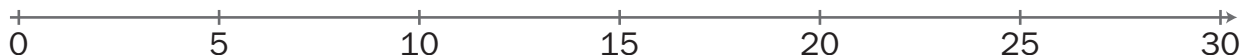
a)  $20 - 9 =$



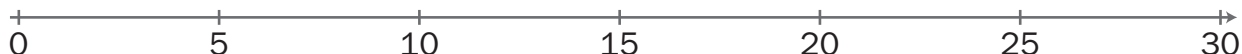
b)  $30 - 11 =$



c)  $25 - 12 =$



d)  $30 - 14 =$



e)  $28 - 15 =$



f)  $29 - 19 =$

