


NOME: _____ DATA: _____

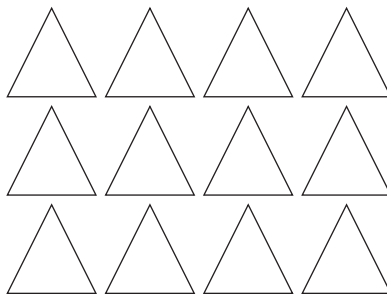
DOBRO E METADE, TRIPLO E TERÇA PARTE

1 Pinta de acordo com as indicações.


a) Metade.



b) Terça parte.




c) Terça parte.




2 Desenha de acordo com as indicações.


a) O dobro de 3 maçãs.



b) O triplo de 4 ovos.



c) O triplo de 5 feijões.



3 Completa.

a) O dobro de 6 é _____
 $2 \times 6 =$ _____

c) O triplo de 6 é _____
 $3 \times 6 =$ _____

b) Metade de 8 é _____
 $8 : 2 =$ _____

d) A terça parte de 12 é _____
 $12 : 3 =$ _____