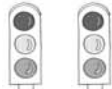

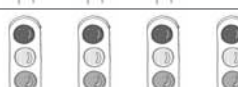
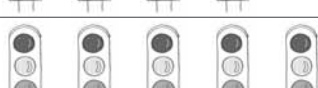









NOME: _____ DATA: _____

TABUADAS DO 3 E DO 6

1 Completa.

	$2 \times 3 = \square$
	$\square \times 3 = \square$
	$\square \times 3 = \square$
	$\square \times 3 = \square$
	$\square \times \square = \square$
	$\square \times \square = \square$
	$\square \times \square = \square$
	$\square \times \square = \square$
	$\square \times \square = \square$
	$\square \times \square = \square$
	$\square \times \square = \square$

2 Completa com os resultados das tabuadas.

x	1	2	3	4	5	6	7	8	9	10	11	12
3												
6												