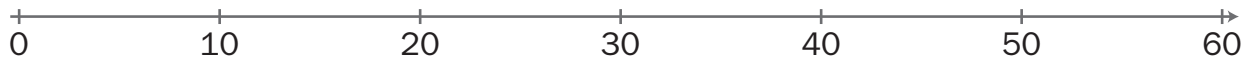


NOME: \_\_\_\_\_ DATA: \_\_\_\_\_

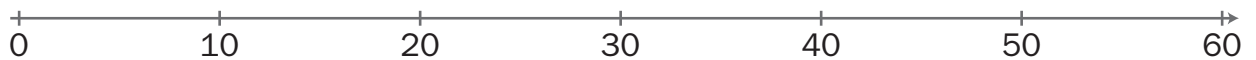
## ADIÇÃO — ESTRATÉGIAS DE CÁLCULO

- 1 Na reta numérica, utiliza as estratégias mais fáceis para resolveres as adições. Regista a forma como o fizeste.

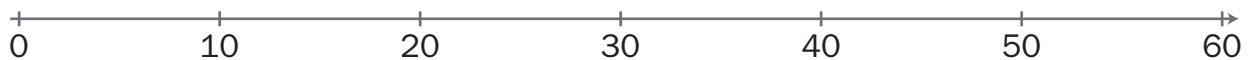
a)  $13 + 20 =$



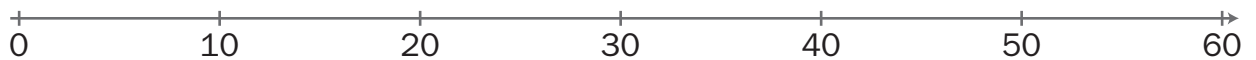
b)  $18 + 11 =$



c)  $33 + 21 =$



d)  $15 + 29 =$



e)  $11 + 39 =$

