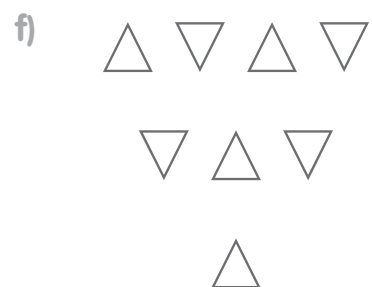
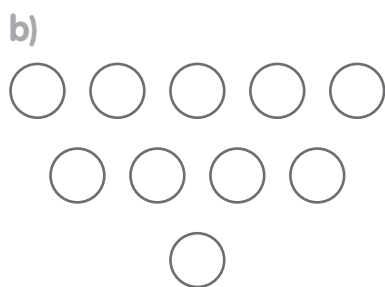





NOME: _____ DATA: _____


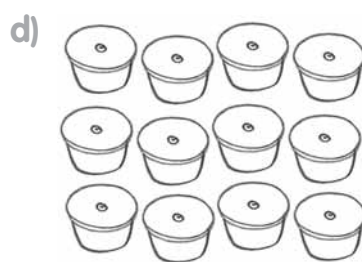
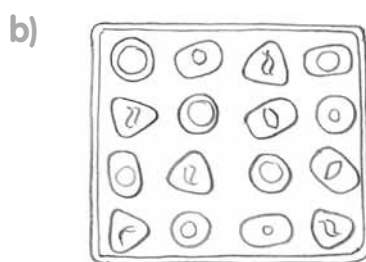
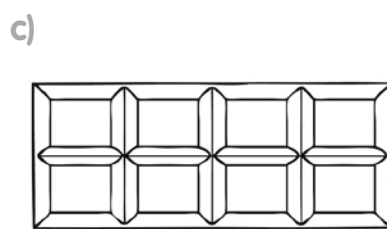
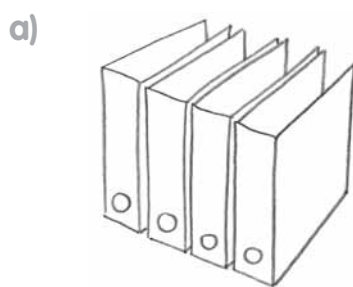
DIVIDIR EM PARTES

1 Pinta metade de cada figura.



2 Partilha com os teus colegas a forma como pintaste as figuras do exercício anterior. Os teus colegas pintaram da mesma maneira? O que fizeram de diferente?

3 Em cada figura, pinta: uma quarta parte de verde, outra quarta parte de amarelo e o restante de vermelho.



4 Que parte de cada uma das figuras do exercício anterior corresponde à parte pintada de vermelho? _____