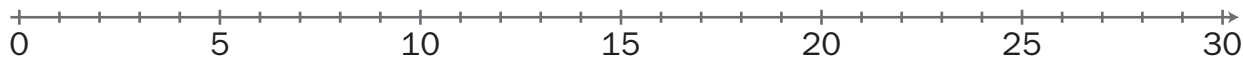


NOME: _____ DATA: _____

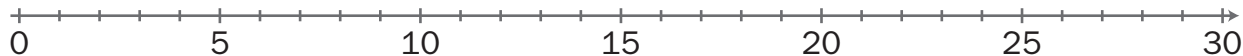
ADIÇÃO

1 Calcula, utilizando as retas numéricas.

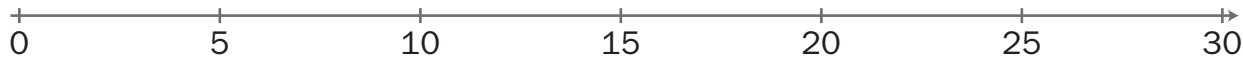
a) $13 + 7 =$



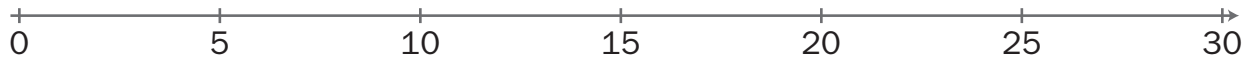
b) $14 + 10 =$



c) $15 + 9 =$



d) $20 + 4 =$



e) $12 + 10 =$



f) $15 + 11 =$

