


NOME: \_\_\_\_\_ DATA: \_\_\_\_\_

## TABUADAS DO 5 E DO 10

**1** Completa de modo a obteres o número total de pétalas.



$1 \times 5 = 5$




$\square \times 5 = \square$



$\square \times 5 = \square$



$\square \times 5 = \square$



$\square \times 5 = \square$




$\square \times 5 = \square$


**2** Completa de modo a obteres o número total de raios das rodas de bicicleta.




$1 \times 10 = 10$




$\square \times 10 = \square$




$\square \times 10 = \square$



$4 \times 10 = 40$



$\square \times 10 = \square$



$\square \times 10 = \square$

**3** Completa a tabela.

x	1	2	3	4	5	6	7	8	9	10	11	12
5												
10												