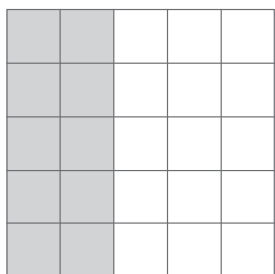


NOME: \_\_\_\_\_ DATA: \_\_\_\_\_

## MULTIPLICAÇÃO

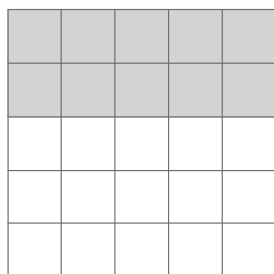
1 Pinta e completa, como no exemplo.

a) Exemplo:



5 linhas de 2

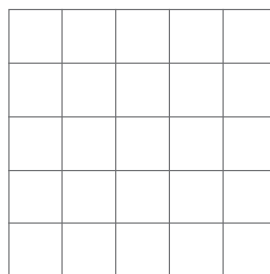
$$5 \times 2 = 10$$



2 linhas de 5

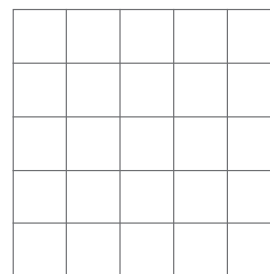
$$2 \times 5 = 10$$

d)



4 linhas de 3


$$4 \times 3 = \square$$



3 linhas de 4

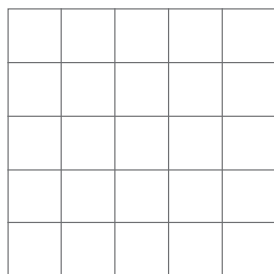
$$3 \times 4 = \square$$

b)



linhas de

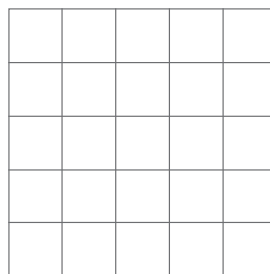
$$\square \times \square = \square$$



linhas de

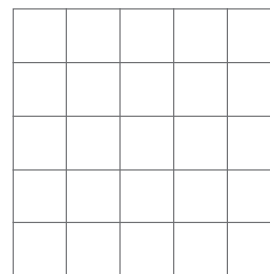
$$\square \times \square = \square$$

e)



2 linhas de 2

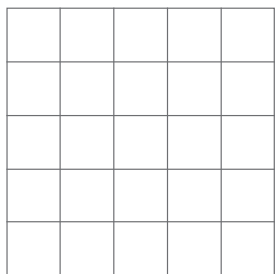
$$\square \times \square = \square$$



linhas de

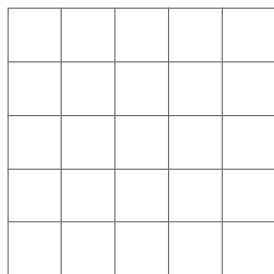
$$\square \times \square = \square$$

c)



linhas de

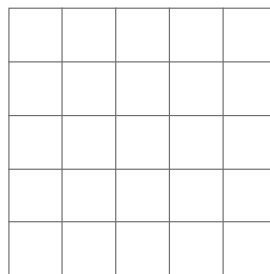
$$3 \times 5 = \square$$



linhas de

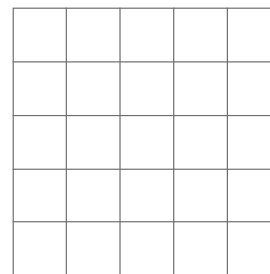
$$\square \times \square = \square$$

f)



2 linhas de 4

$$\square \times \square = \square$$



linhas de

$$\square \times \square = \square$$