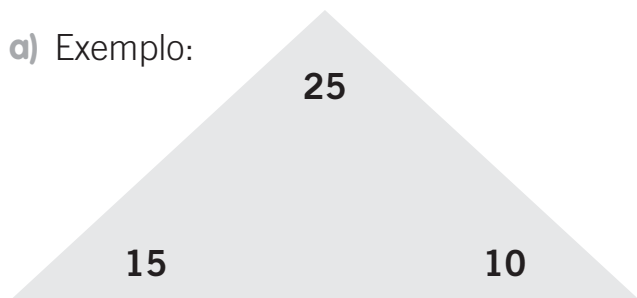


NOME: _____ DATA: _____

ADIÇÃO E SUBTRAÇÃO

1 Descobre as relações entre os números indicados em cada situação e completa, como no exemplo.

a) Exemplo:



$$15 + 10 = 25$$

$$10 + 15 = 25$$

$$25 - 15 = 10$$

$$25 - 10 = 15$$

c)



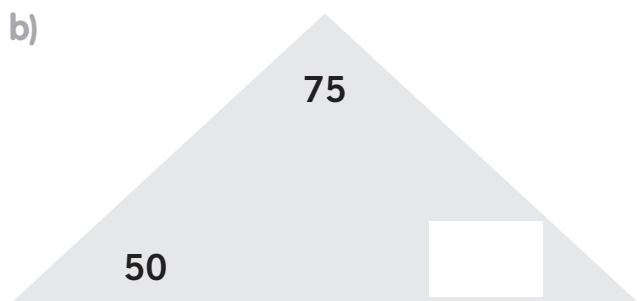
$$70 + 30 = \square$$

$$30 + 70 = \square$$

$$100 - \square = \square$$

$$\square - \square = \square$$

b)



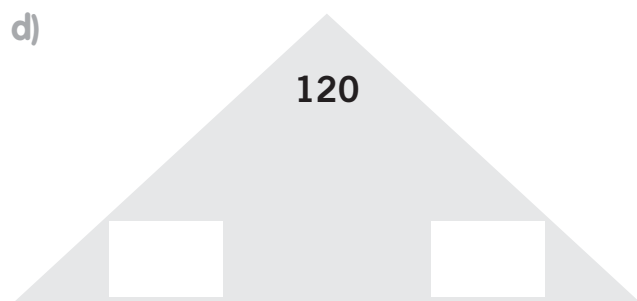
$$50 + \square = \square$$

$$\square + \square = \square$$

$$\square - \square = \square$$

$$\square - \square = \square$$

d)



$$30 + \square = \square$$

$$\square + \square = \square$$

$$\square - \square = \square$$

$$\square - \square = \square$$