



Nome: \_\_\_\_\_

Data: \_\_\_/\_\_\_/\_\_\_


1. Cobre e completa.

10	10	10	10	10	10	10	10	10	10	10	10	10	10	10	10
10	10														


2. Pinta 10 contas no colar de contas.




3. Observa e completa com as pintas que faltam e com números de 1 a 9 sem repetires nenhum número.




10




$1 + 9 = 10$




$\boxed{2} + \boxed{\phantom{00}} = 10$



$\boxed{\phantom{00}} + \boxed{\phantom{00}} = 10$




$\boxed{\phantom{00}} + \boxed{\phantom{00}} = 10$

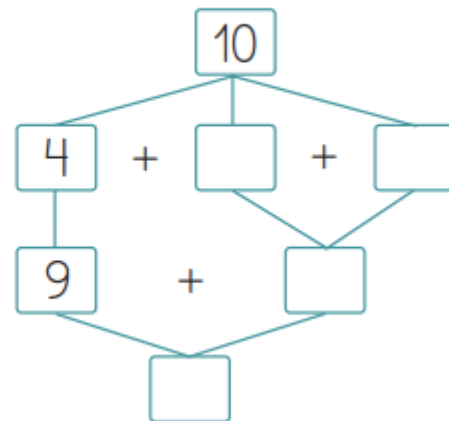
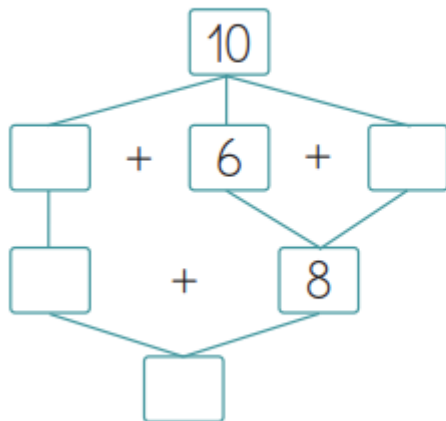


$\boxed{\phantom{00}} + \boxed{\phantom{00}} = 10$

4. Rodeia 10 gatos.



5. Completa.



6. Numa pastelaria havia 10 fatias de bolo para vender. No fim do almoço já se tinham vendido 7 fatias. Quantas fatias sobraram?



Resposta: Sobraram  fatias.