
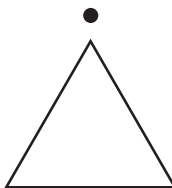
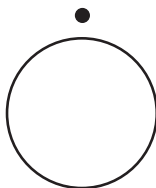



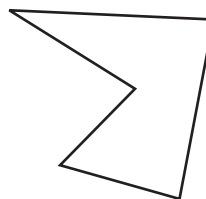
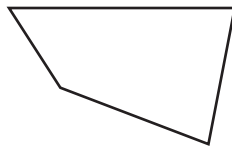
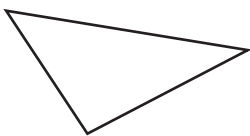
NOME: _____ DATA: _____

FIGURAS GEOMÉTRICAS


1 Liga cada sinal de trânsito à forma geométrica a que se assemelha.



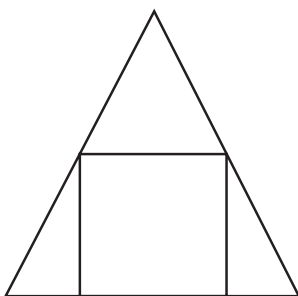
2 Pinta de amarelo as figuras que têm **3 lados** e de azul as figuras que têm **4 lados**.



• Regista quantos lados tem a figura que não pintaste.

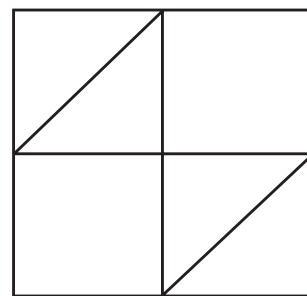


3 Regista quantos **triângulos** e quantos **quadrados** consegues ver nas figuras.



Triângulos: _____

Quadrados: _____



Triângulos: _____

Quadrados: _____