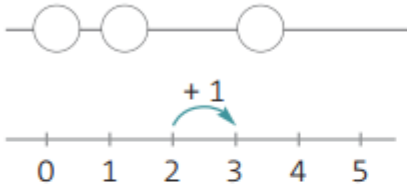




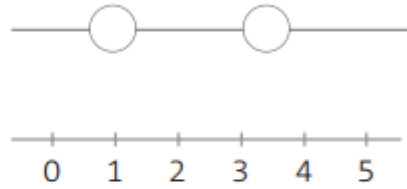
Nome: _____

Data: ___/___/___

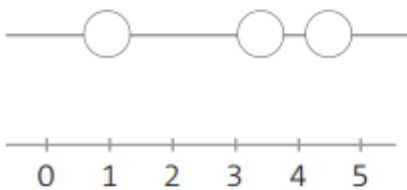
1. Observa o exemplo e completa.



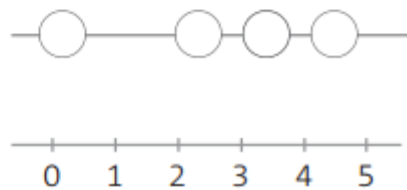
$$2 + 1 = \boxed{3}$$



$$1 + 1 = \boxed{}$$



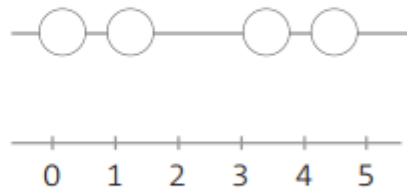
$$1 + 2 = \boxed{}$$



$$1 + 3 = \boxed{}$$

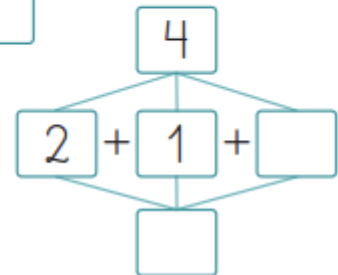
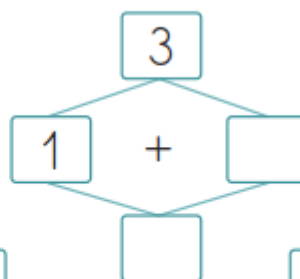
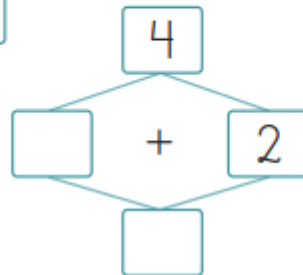
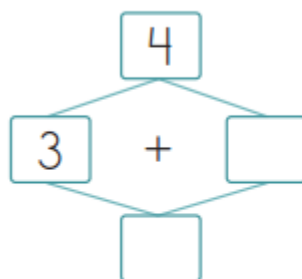


$$3 + 1 = \boxed{}$$



$$2 + 2 = \boxed{}$$

2. Calcula e preenche os esquemas.



3. O Nuno tem 1 balão amarelo e 2 azuis.
Quantos balões tem o Nuno?

● Completa.

$$\square \circ \square = \square$$



Resposta: O Nuno tem balões.

4. Observa, completa e responde.

● Quantas flores?



Há flores.

● Desenha mais duas flores. Quantas flores ficaram?



$$\square \circ \square = \square$$

Resposta: Ficaram flores.

● Quantos gorros?



Há gorro.

● Desenha mais um gorro. Quantos gorros ficaram?



$$\square \circ \square = \square$$

Resposta: Ficaram gorros.